

Planar Turán Number of the Θ_6

Debarun Ghosh¹ Ervin Győri^{1,2} Addisu Paulos¹
Chuanqi Xiao¹ Oscar Zamora¹

¹Central European University, Budapest
oscarz93@yahoo.es, chuanqixm@gmail.com,
ghosh_debarun@phd.ceu.edu, addisu_2004@yahoo.com

²Alfréd Rényi Institute of Mathematics, Budapest
gyori.ervin@renyi.mta.hu

⁴Universidad de Costa Rica, San José

Abstract

Let F be a graph. The planar Turán number of F , denoted by $\text{ex}_{\mathcal{P}}(n, F)$, is the maximum number of edges in an n -vertex planar graph containing no copy of F as a subgraph. Let Θ_k denote the family of Theta graphs on $k \geq 4$ vertices, that is, a graph obtained by joining a pair of non-consecutive vertices of a k -cycle with an edge. Y. Lan, et.al. determined sharp upper bound for $\text{ex}_{\mathcal{P}}(n, \Theta_4)$ and $\text{ex}_{\mathcal{P}}(n, \Theta_5)$. Moreover, they obtained an upper bound for $\text{ex}_{\mathcal{P}}(n, \Theta_6)$. They proved that, $\text{ex}_{\mathcal{P}}(n, \Theta_6) \leq \frac{18}{7}n - \frac{36}{7}$. In this paper, we improve their result by giving a bound which is sharp. In particular, we prove that $\text{ex}_{\mathcal{P}}(n, \Theta_6) \leq \frac{18}{7}n - \frac{48}{7}$ and demonstrate that there are infinitely many n for which there exists a Θ_6 -free planar graph G on n vertices, which attains the bound.

1 Introduction

In this paper, all graphs considered are planar, undirected, finite, and contains neither loop nor multiple edges. We use the notations C_k and P_k to denote cycle and path of length k respectively. Let Θ_k denote the family of Theta graphs on $k \geq 4$ vertices, that is, a graph obtained by joining a pair of non-consecutive vertices of a C_k with an edge. We describe a member of Θ_k as Θ_k -graph. It can be checked that the family, Θ_k , contains $\lfloor \frac{k}{2} \rfloor - 1$ Θ_k -graphs. We call a graph G as Θ_k -free if it contains no Θ_k -graph as a subgraph. Moreover, we say G contains Θ_k if there is a Θ_k -graph contained in G .

One of the famous problems in extremal graph theory is the determination of the number of edges in an n -vertex graph to force a certain graph structure. Regarding this, the well-known result is the Turán's Theorem [6], which gives the maximum number of edges in an

n -vertex graph containing no complete graph of a given number of vertices. The maximum number of edges in an n -vertex graph containing no F as a subgraph is denoted by $\text{ex}(n, F)$, which is named as Turán number of F following Turán's initial results. Erdős, Stone and Simonovits [2, 3] gave generalized result and asymptotically determines $\text{ex}(n, F)$ for all non-bipartite graphs F . They proved that $\text{ex}(n, F) = (1 - \frac{1}{\chi(F)-1}) \binom{n}{2} + o(n^2)$, where $\chi(F)$ denotes the chromatic number of F .

Over the last decade, a considerable amount of research work has been carried out in Turán type problems, for example, when host graphs are K_n , k -uniform hypergraphs, or k -partite graphs, see [3, 7].

In 2015, Dowden [1] initiated the study of Turán-type problems when the host graph is planar, i.e., how many edges a planar graph on n vertices can have without containing a given smaller graph? The planar Turán number of a graph F , $\text{ex}_{\mathcal{P}}(n, F)$, is the maximum number of edges in a planar graph on n vertices containing no F as a subgraph. Dowden [1] obtained the following results when F is C_4 and C_5 .

Theorem 1. [1]

1. $\text{ex}_{\mathcal{P}}(n, C_4) \leq \frac{15(n-2)}{7}$, for all $n \geq 4$.
2. $\text{ex}_{\mathcal{P}}(n, C_5) \leq \frac{12n-33}{5}$, for all $n \geq 11$.

Extending the results, Lan, Shi and Song [5] obtained tight upper bound for $\text{ex}_{\mathcal{P}}(n, \Theta_i)$, for $i \in \{4, 5\}$ and an upper bound for $\text{ex}_{\mathcal{P}}(n, \Theta_6)$. They showed that

Theorem 2. [5]

1. $\text{ex}_{\mathcal{P}}(n, \Theta_4) \leq \frac{12(n-2)}{5}$, for all $n \geq 4$.
2. $\text{ex}_{\mathcal{P}}(n, \Theta_5) \leq \frac{5(n-2)}{2}$, for all $n \geq 5$.
3. $\text{ex}_{\mathcal{P}}(n, \Theta_6) \leq \frac{18(n-2)}{7}$, for all $n \geq 6$, with equality when $n = 9$.

From (3), they also deduced that $\text{ex}_{\mathcal{P}}(n, C_6) \leq \frac{18(n-2)}{7}$. Recently Ghosh, Győri, Martin, Paulos and Xiao [4], improved the result by giving sharp upper bound. Their result is as follows:

Theorem 3. [4] $\text{ex}_{\mathcal{P}}(n, C_6) \leq \frac{5}{2}n - 7$, for all $n \geq 18$.

In this paper, we improve the additive constant of the bound of $\text{ex}_{\mathcal{P}}(n, \Theta_6)$ given in Theorem 2 and illustrate that our bound is sharp. The following are our results.

Theorem 4. Let $n \geq 6$. If G is an n -vertex 2-connected Θ_6 -free planar graph with $\delta(G) \geq 3$, then $e(G) \leq \frac{18}{7}n - \frac{48}{7}$.

Theorem 5. $\text{ex}_{\mathcal{P}}(n, \Theta_6) \leq \frac{18}{7}n - \frac{48}{7}$, for all $n \geq 14$. Equality can only hold if G is 2-connected.

To show the bound is sharp, we find infinitely many n and n -vertex planar graph G containing no Θ_6 such that $e(G) = \frac{18}{7}n - \frac{48}{7}$, where $e(G)$ is the number of edges in G .

The following notations are used frequently in the upcoming sections. Let G be a graph. We denote the vertex and the edge sets of G by $V(G)$ and $E(G)$ respectively. We also denote the number of vertices and edges in G by $v(G)$ and $e(G)$ respectively. For a vertex v in G , the degree of v is denoted by $d_G(v)$. We may omit the subscript if the underlying graph is clear. The set of all vertices in G which are adjacent to v is denoted as $N(v)$. We use $\delta(G)$ to denote the minimum degree of G . For the sake of simplicity, we use the term k -cycle to mean the cycle of length k . Similarly for k -path, k -face, and so on.

In the following section we show that the bound in Theorem 5 is sharp by demonstrating infinitely many Θ_6 -free planar graphs attaining the bound.

2 Extremal Construction

In this section we show existence of infinitely many integer n and planar graph G on n vertices such that $e(G) = \frac{18}{7}n - \frac{48}{7}$. This is done based on Dowden's construction in [1] (with some modification) while showing the bound $\text{ex}_{\mathcal{P}}(n, C_5) \leq \frac{12n-33}{5}$ is tight. The following lemma plays the central role in proving so.

Lemma 1. [1] *For infinitely many values of k , there exists a plane triangulation T_k with vertex set $\{v_1, v_2, \dots, v_k\}$ satisfying*

1. $d(v_i) = 4$ for $i \leq 6$,
2. $d(v_i) = 6$ for $i > 6$,
3. $E(T_k) \supset \{v_1v_2, v_3v_4, v_5v_6\}$.

For instance the case of T_{15} is as shown in Figure 1. The red edges shown in the figure are those indicated (3) of the Lemma 1. As a consequence of Lemma 1, we have the following theorem.

Theorem 6. *There exist infinitely many integer n and an n -vertex planar graph G which is Θ_6 -free such that $e(G) = \frac{18}{7}n - \frac{48}{7}$.*

Proof. We use the triangulation T_k which is obtained from Lemma 1 to prove the theorem. See Figure 1 for the case of $k = 15$. Let E^* denote the set edges $\{v_1v_2, v_3v_4, v_5v_6\}$ as stated in the lemma. For the example in Figure 1, E^* is the set of the red edges. We construct the base graph G_k (with $4k + 12$ vertices) from T_k with the following procedures.

1. Subdivide all edges in $E(T_k) \setminus E^*$. Notice that since T_k is a maximal plane graph with k vertices, then $e(T_k) = 3k - 6$. Thus, the number of subdividing vertices is $3k - 9$.
2. Replace all edges in E^* with the ‘‘Diamond holder’’ shown in Figure 2(b, bottom). Denote the newly obtained plane graph as G_k . The case of G_{15} is shown in Figure

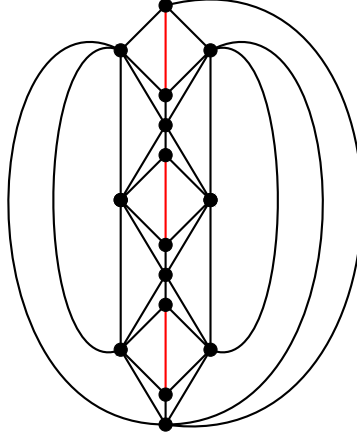


Figure 1: An example of Lemma 1 with 15 vertices.

2(a). Notice that all the k vertices of the T_k in the G_k are degree 6 vertices (including the six vertices that only had degree 4 in T_k). For instance, all the red vertices in G_{15} , see Figure 2(a), are the 15 vertices of T_{15} and each of this vertex is of degree 6 in G_{15} . We can consider all the k vertices of T_k as centre of the star $K_{1,6}$ in G_k .

Next, we construct G using the base graph G_k as follows. Replace each star, $K_{1,6}$, with a “snow flake” shown in Figure 2(b, top), where the central vertex of the star is replaced by a hexagon and the edges are replaced by K_5^- 's. Let the graph we obtained be G and containing n vertices. Notice that G contains k snowflakes and 3 diamond holders.

Now we count the number of vertices of G in terms of k . Notice the number of vertices of a snow lake except the tip vertices of the six K_5^- is 18. Thus, G has $18k$ such vertices. The remaining vertices of G are the subdividing vertices, which is $3k - 9$, and 21 vertices of the three diamond holders. Thus, $n = 18k + (3k - 9) + 21 = 21k + 12$. This implies, $k = \frac{n-12}{21}$.

Let us now compute the number of edges in G . It can be checked that each snowflake contains 54 edges. The remaining edges are the 8 edges that appear in the interior (except the two hanging edges) of each diamond holder. Thus, $e(G) = 54k + 24$.

Therefore, using the two results we get $e(G) = \frac{18}{7}n - \frac{48}{7}$.

Notice each face of G is with size either 3 or 6. Moreover, a 6-face in G is either with all its six edges incident to a K_5^- (see the snowflake on Figure 2(b, top)) or 4 consecutive edges incident to K_5^- 's and the remaining 2-path incident to a K_5^- as shown in Figure 4($B_{5,b}$). Therefore, G is Θ_6 -free. \square

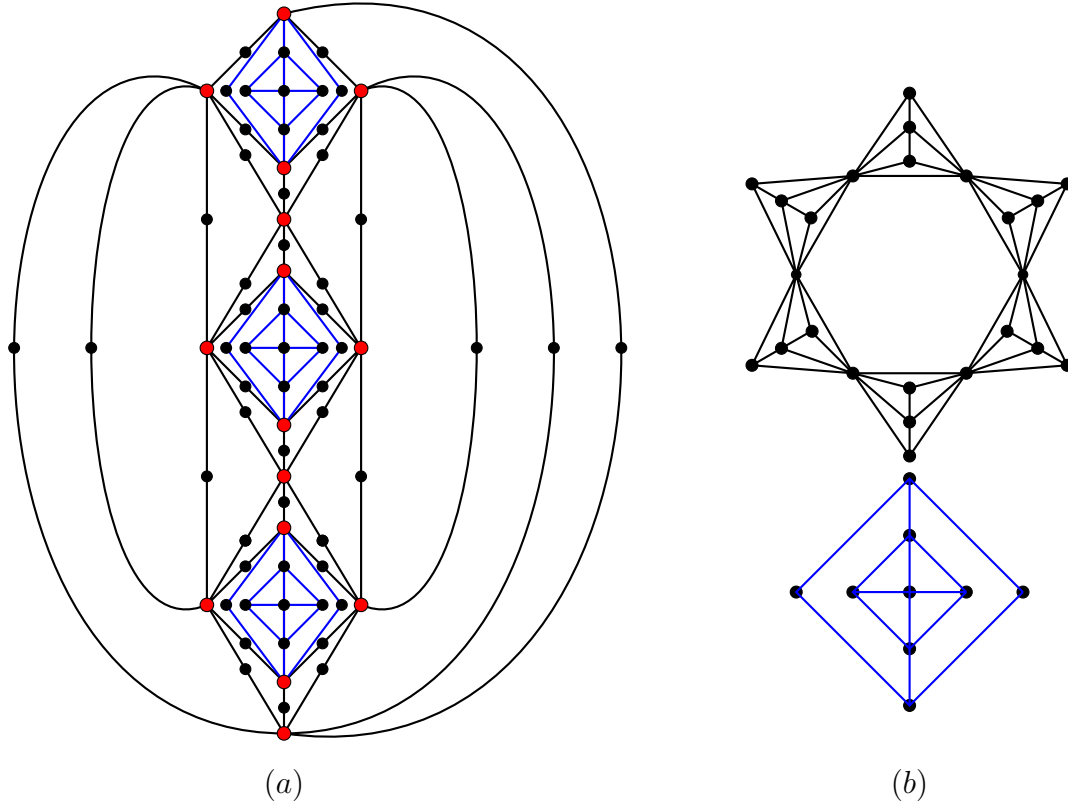


Figure 2: Construction of base graph G_{15} from T_{15} .

3 Notations and Preliminaries

We use similar techniques as used in [4]. We repeat some of the important notations and definitions, and for a more comprehensive discussion we refer the reader to the previous paper.

Definition 1. Let G be a plane graph and $e \in E(G)$. If e is not in a 3-face of G , then we call it a **trivial triangular-block**. Otherwise, we recursively construct a **triangular-block** in the following way. Start with H as a subgraph of G , such that $E(H) = \{e\}$.

1. Add the other edges of the 3-face containing e to $E(H)$.
2. Take $e' \in E(H)$ and search for a 3-face containing e' . Add these other edge(s) in this 3-face to $E(H)$.
3. Repeat step 2 till we cannot find a 3-face for any edge in $E(H)$.

We denote the block obtained from e as the starting edge, by $B(e)$.

Let \mathcal{B} be the family of triangular-blocks of G . We have $e(G) = \sum_{B \in \mathcal{B}} e(B)$, where $e(G)$ and $e(B)$ are number of edges of G and B respectively. For a triangular-block B in a plane graph G , we may call $e(B)$ as the contribution of B to the number of edges in G .

Definition 2. Let G be a plane graph. A vertex v in G is called a **junction vertex** if it is shared by at least two triangular-blocks of G .

Definition 3. Let B be a triangular-block in a plane graph G . The contribution of B to the number of vertices in G , denoted by $n(B)$, is defined as

$$n(B) = \sum_{v \in V(B)} \frac{1}{\# \text{ blocks sharing } v}.$$

For a plane graph G and \mathcal{B} , the set of all triangular-blocks of G , one can see that $v(G) = \sum_{B \in \mathcal{B}} n(B)$. The following lemma describes the number of vertices that a possible triangular-block of a Θ_6 -free plane graph may contain.

Lemma 2. Let G be a plane graph containing no Θ_6 . Then every triangular-block of G contains at most 5 vertices.

Proof. We prove it by contradiction. Let B be a triangular-block of G containing at least 6 vertices. Since the block is obtained recursively starting with an edge and adding vertex and edges, then there is a triangular-block of size 6 which is contained in B . Let this block be B' . We consider the following two cases to complete the proof.

Case 1. B' contains a separating triangle.

Let $x_1x_2x_3$ be a separating triangle in B' . Without loss of generality, assume that the inner region of the triangle contains two vertices say, x_4 and x_5 . The outer region of the triangle contains one vertex, say x_6 . Since $B - x_6$ is a maximal plane graph on 5 vertices, then it is unique. Without loss of generality, let the graph be as shown in the Figure 3(a). Now consider the vertex x_6 . If $x_2, x_3 \in N(x_6)$, then $x_1x_4x_5x_2x_6x_3x_1$ is a Θ_6 -graph and is in G , which is a contradiction to the fact that G is Θ_6 -free. Similarly for the cases when $x_1, x_2 \in N(x_6)$ and $x_1, x_3 \in N(x_6)$.

Case 2. B' contains no separating triangle.

Let $x_1x_2x_3$ be a triangular face in B' . Let x_4 be a vertex in the block such that $x_2x_3x_4$ is a 3-face. Notice that $x_1x_4 \notin E(B')$, otherwise, B' contains a separating triangle. Without loss of generality, let x_5 be a vertex in B' such that $x_2x_4x_5$ is a 3-face. Notice that x_6 cannot be adjacent to $\{x_1, x_2\}, \{x_2, x_5\}, \{x_5, x_4\}, \{x_4, x_3\}$ or $\{x_1, x_3\}$. Otherwise, it is easy to show a Θ_6 -graph in G , which is a contradiction. Moreover, $x_3x_5 \notin E(B')$, otherwise B' contains a separating triangle. Thus, $x_1x_5 \in E(B')$ and $x_1, x_5 \in N(x_6)$ (see Figure 3(b)). In this case, $x_1x_6x_5x_2x_4x_3x_1$ is a Θ_6 -graph contained in G , which is a contradiction. \square

We list out all possible triangular-blocks (together with their notations) that a given Θ_6 -free plane graph may contain. Let B_k denote the triangular-block with k vertices.

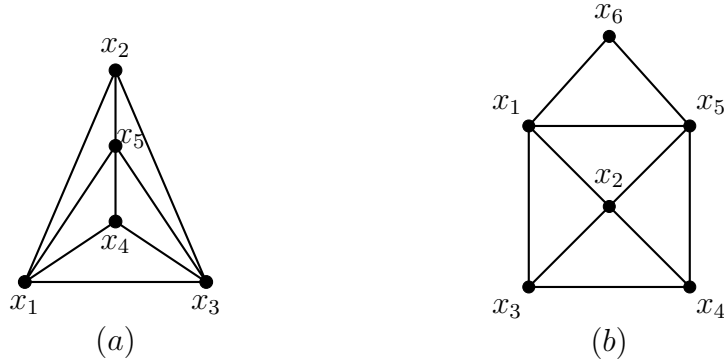


Figure 3: The two cases when either B contains a separating triangle or not respectively.

Triangular-blocks on 5 vertices

There are four types of blocks on 5 vertices (See Figure 4). Notice that $B_{5,a}$ is a K_5^- .

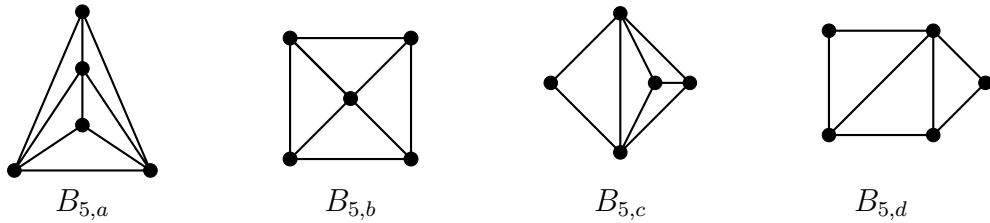


Figure 4: Triangular-blocks on 5 vertices

Triangular-blocks on 2, 3 and 4 vertices

The 2-vertex and 3-vertex blocks are simply K_2 (trivial block) and K_3 (triangle) respectively. There are two triangular blocks on 4 vertices (see the last two graphs in Figure 5). Observe that $B_{4,a}$ is a K_4 .

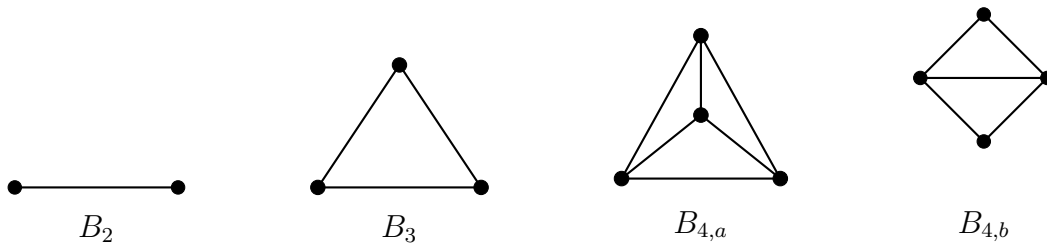


Figure 5: Triangular-blocks on 2, 3 and 4 vertices

Definition 4. Let G be a 2-connected plane graph containing at least 2 triangular-blocks. Let B be a triangular-block in G . An edge of B is called an **exterior edge**, if it is on a

boundary of non triangular face of G . Otherwise, we call it as an **interior edge**. A path P in B given by $x_1x_2\dots x_m$, where x_1 and x_m are the only junction vertices in P and x_ix_{i+1} , is an exterior edge for all $i \in \{1, 2, 3, \dots, m-1\}$ is called an **exterior path** in B . A non triangular face in G for which P is incident with is called **exterior face** of B with exterior path P .

Let G be a 2-connected Θ_6 -free plane graph containing at least two triangular-blocks and $\delta(G) \geq 3$. Next, we define the contribution of a triangular-block B in G to the number of face of G .

Let F be a non-triangular face in G with boundary cycle $x_1x_2x_3\dots x_mx_1$, where $m \geq 4$. We may denote the cycle by F . Consider the cycle F' which is obtained deleting all the vertices and edges in G except vertices and edges of F . We construct a cycle F'' with size at most m in the following way. For each triple consecutive vertices $x_ix_jx_k$ of the cycle F' such that $x_ix_k \in E(G)$ and both x_i and x_k are junction vertices of the same triangular-block in G , delete x_j and join x_i and x_k with an edge. We call the cherry $x_ix_jx_k$ as **bad cherry**, and the cycle F'' as the **refinement** of F .

For instance, let the subgraph of a plane graph G be as shown in Figure 6. Consider the non triangular face, say F , with the boundary cycle $x_1x_2x_3x_4x_5x_6x_7x_8x_9x_{10}x_{11}x_{12}x_{13}x_1$ (see the boundary of the shaded region) and the incident triangular blocks of the face is as shown in the figure. In this case, the bad cherries are $x_7x_6x_5$ and $x_9x_{10}x_{11}$. However $x_{11}x_{12}x_{13}$ is not a bad cherry since the edge $x_{11}x_{13}$ is not an edge of the corresponding triangular-block incident to F . It can be seen that the refinement F'' of F is $x_1x_2x_3x_4x_5x_7x_8x_9x_{11}x_{12}x_{13}x_1$, with size 11.

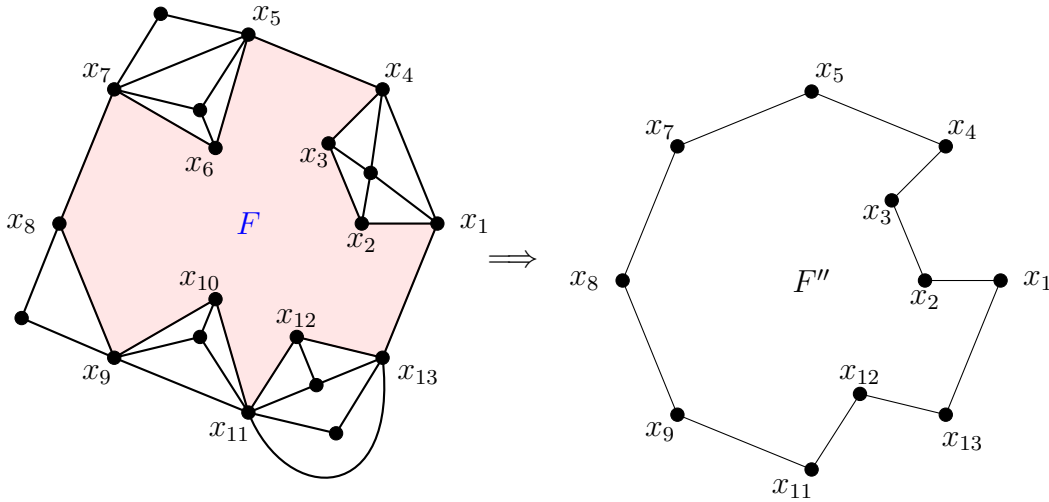


Figure 6: An example showing how to compute the size of the refinement of non-triangular face in a plane graph.

Definition 5. Let G be a 2-connected Θ_6 -free plane graph containing at least two triangular-blocks and $\delta(G) \geq 3$. Let B be a triangular block and F_1, F_2, \dots, F_m be exterior faces of the

triangular-block. Consider an exterior face F_i of B for some $i \in \{1, 2, \dots, m\}$ with an exterior path P of the triangular-block. We define the contribution of B to the face size of F_i (denoted as $f_{F_i}(B)$) as follows.

1. If P is not a bad cherry,

$$f_{F_i}(B) = \frac{\text{length of } P}{\text{length of } F_i''}.$$

2. If P is a bad cherry,

$$f_{F_i}(B) = \frac{1}{\text{length of } F_i''}.$$

Where F_i'' is the refinement of F_i .

The contribution of the triangular-block B to the number of face of the graph G (denoted as $f(B)$) is defined as:

$$f(B) = \sum_{i=1}^m f_{F_i}(B) + (\# \text{ triangular faces in } B).$$

Let G be a 2-connected Θ_6 -free plane graph containing at least two triangular-blocks and $\delta(G) \geq 3$. Let \mathcal{B} be the family of triangular-blocks in G . It can be checked that $f(G) = \sum_{B \in \mathcal{B}} f(B)$, where $f(G)$ is number of faces in G .

4 Proof of Theorem 4.

We begin by outlining our proof. Consider a plane drawing of G . Let $f(G)$ and $e(G)$ be the number of faces and edges of G respectively. Let \mathcal{B} be the family of all triangular-blocks of G . The main target of the proof is to show that

$$24f(G) - 17e(G) + 6v(G) \leq 0. \quad (1)$$

where $v(G)$ is number of vertices of in G (in this case n).

Once we show (1), then by using the Euler's Formula, $e(G) = f(G) + v(G) - 2$, we can finish the proof of the Theorem.

To prove (1), we show the existence of a partition $\{\mathcal{P}_1, \mathcal{P}_2, \dots, \mathcal{P}_m\}$ of \mathcal{B} such that $24 \sum_{B \in \mathcal{P}_i} f(B) - 17 \sum_{B \in \mathcal{P}_i} e(B) + 6 \sum_{B \in \mathcal{P}_i} n(B) \leq 0$, for all $i \in \{1, 2, 3, \dots, m\}$. Since $f(G) = \sum_{B \in \mathcal{B}} f(B)$, $v(G) = \sum_{B \in \mathcal{B}} n(B)$ and $e(G) = \sum_{B \in \mathcal{B}} e(B)$ we have,

$$\begin{aligned} 24f(G) - 17e(G) + 6v(G) &= 24 \sum_{i=1}^m \sum_{B \in \mathcal{P}_i} f(B) - 17 \sum_{i=1}^m \sum_{B \in \mathcal{P}_i} e(B) + 6 \sum_{i=1}^m \sum_{B \in \mathcal{P}_i} n(B) \\ &= \sum_{i=1}^m \left(24 \sum_{B \in \mathcal{P}_i} f(B) - 17 \sum_{B \in \mathcal{P}_i} e(B) + 6 \sum_{B \in \mathcal{P}_i} n(B) \right) \leq 0. \end{aligned}$$

To justify the existence of such partition, we prove sequence of claims about an upper bound of $24f(B) - 17e(B) + 6n(B)$ for each type of triangular-block which may possibly be contained in G . For simplicity of our computation, we define

$$g(B) := 24f(B) - 17e(B) + 6n(B).$$

Claim 1. *Let B be a $B_{5,a}$ block in G . Then $g(B) \leq 0$.*

Proof. Let the exterior vertices of B be labeled as x_1, x_2 and x_3 as shown in Figure 7. Since the graph is 2-connected, B contains at least 2 junction vertices. We consider two cases depending on the number of junction vertices of B .

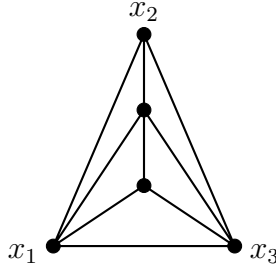


Figure 7: $B_{5,a}$ block

1. **B contains exactly two junction vertices.**

Without loss of generality, assume that the vertices x_2 and x_3 are the junction vertices. Let the exterior faces of the exterior edge x_2x_3 and the exterior path $x_2x_1x_3$ are respectively F_1 and F_2 . It is an easy check that the size of F_1 and F_2 are at least 6 and 7 respectively. Clearly, the refinement F'_1 is with size at least 6. Since $x_2x_1x_3$ is a bad cherry, then the refinement F'_2 is with size at least 6. The number of triangular faces in B is 5. Thus, $f(B) \leq 5 + 1/6 + 1/6$. To get the optimal estimate of $n(B)$, we may assume that the junction vertices are shared with two blocks. Thus, $n(B) \leq 3 + 1/2 + 1/2$. Using $e(B) = 9$, we get $g(B) \leq -1$.

2. **B contains three junction vertices.**

In this case each of the exterior edge has an exterior face of size at least 6. Thus, $f(B) \leq 5 + 3/6$. To get the optimal estimate of $n(B)$, we may assume that the junction vertices are shared with two blocks. Thus, $n(B) \leq 2 + 3/2$. Therefore using $e(B) = 9$ we obtain $g(B) \leq 0$. □

Claim 2. *Let B be a $B_{5,b}$ block in G . Then $g(B) \leq 0$.*

Proof. Since the graph contains no cut vertex, the number of junction vertices of the block is at least 2. Hence, $n(B) \leq 3 + 1/2 + 1/2$. It can be checked that each of the exterior edge of the block has an exterior face of size at least 6. Hence $f(B) \leq 4 + 4/6$. Using $e(B) = 8$, we get $g(B) \leq 0$. □

Claim 3. Let B be a $B_{5,c}$ block in G . Then $g(B) \leq 0$.

Proof. Let the exterior vertices of the block be x_1, x_2, x_3 and x_4 as shown in Figure 8. Since

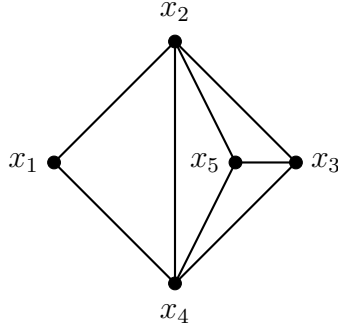


Figure 8: $B_{5,c}$ block

$\delta(G) \geq 3$, x_1 is a junction vertex. However, x_3 may or may not be a junction vertex. So, we distinguish two cases.

1. x_3 is a junction vertex.

Each of the exterior edge of the block is with an exterior face of size at least 6. Thus, $f(B) \leq 4 + 4/6$. Clearly, $n(B) \leq 3 + 1/2 + 1/2$ and $e(B) = 8$. Consequently $g(B) \leq 0$.

2. x_3 is not a junction vertex.

In this case either both x_2 and x_4 are junction vertices or only one of them is a junction vertex. Otherwise, the graph contains a cut vertex. So, we have the following two cases.

(a) Only one of the two vertices, x_2 or x_4 , is a junction vertex. Without loss of generality, assume x_2 is a junction vertex. It can be checked that, the exterior faces of the exterior edge x_1x_2 is of size at least 6. Moreover, the size of the exterior face of the exterior path $x_1x_4x_3x_2$ is at least 7. Thus, $f(B) \leq 4 + 1/6 + 3/7$. We can assume that the junction vertices are shared with 2 triangular blocks to get an upper bound of $n(B)$. Hence, $n(B) \leq 3 + 1/2 + 1/2$. Therefore, we get $g(B) \leq -\frac{14}{7}$.

(b) Both x_2 and x_4 are junction vertices. In this case, the exterior path $x_2x_3x_4$ has an exterior face of size at least 4. The exterior faces of the exterior edges x_1x_2 and x_1x_4 have size at least 6. Thus $f(B) \leq 4 + 2/6 + 1/3$. Since the junction vertices x_1, x_2 and x_4 are shared with at least two blocks we get $n(B) \leq 2 + 3/2$. Therefore, $g(B) \leq -3$.

□

Claim 4. Let B be a $B_{5,d}$ block in G . Then $g(B) \leq 0$.

Proof. Let B be with its vertices labeled x_1, x_2, x_3, x_4 and x_5 as seen in Figure 9. Notice that x_2 and x_4 are junction vertices. It can be checked that each of the exterior edges of the block has an exterior face of size at least 6. Thus, $f(B) \leq 3 + 5/6$. We estimate that $n(B) \leq 3 + \frac{1}{2} + \frac{1}{2}$. Therefore using $e(B) = 7$, we get $g(B) \leq -3$. □

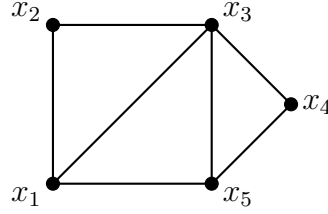


Figure 9: $B_{5,d}$ block

Claim 5. Let B be a $B_{4,a}$ block in G . Then $g(B) \leq 0$.

Proof. Consider B with the exterior vertices labeled x_1, x_2 and x_3 as shown in Figure 10(left). Since the graph does not contain a cut vertex, the block contains at least two junction vertices. So we distinguish two cases.

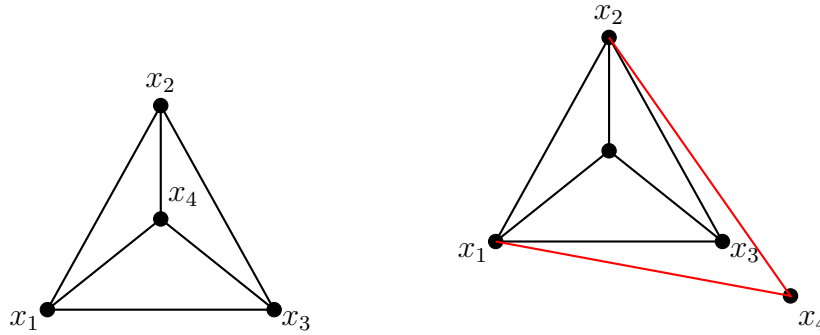


Figure 10: $B_{4,a}$ block

1. All the three vertices are junction.

In this case each of the three exterior edges are with exterior face of size at least 6. Thus, $f(B) \leq 3 + 3/6$. Moreover, $n(B) \leq 1 + 3/2$ and $e(B) = 6$. Therefore, $g(B) \leq -3$.

2. Only two of the vertices are junction.

Without loss of generality, assume that the junction vertices are x_1 and x_2 . In this case, the exterior face of the exterior edge x_1x_2 is of size at least 6. However the exterior path $x_1x_3x_2$ is with size at least 4. So, $f(B) \leq 3 + 1/6 + 1/3$. Since, the block has two junction vertices, then $n(B) \leq 2 + 1/2 + 1/2$. Using $e(B) = 6$, we get $g(B) \leq 0$.

□

Claim 6. Let B be a $B_{4,b}$ block in G . Then $g(B) \leq 3$.

Proof. Consider the block B with the labeled vertices x_1, x_2, x_3 and x_4 as seen in Figure 11(left). Clearly x_2 and x_4 are junction vertices. We distinguish two cases as follows.

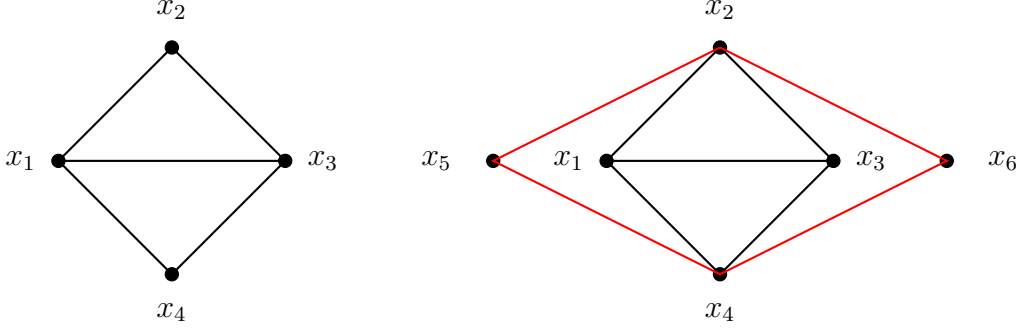


Figure 11: Caption

1. **At least one of x_1 and x_3 is a junction vertex.**

Without loss of generality, assume x_1 is a junction vertex. In this case the size of the exterior faces of the exterior edges x_1x_2 and x_1x_4 are at least 6. On the other hand, we may consider x_3 is not a junction vertex to obtain the optimal value. Hence the size of the exterior face of the exterior path $x_2x_3x_4$ is 4. Hence, $f(B) \leq 2 + 2/6 + 2/4$. Moreover we have, $n(B) \leq 1 + 3/2$ and $e(B) = 5$. Therefore, $g(B) \leq -2$.

2. **Both x_1 and x_3 are not junction vertices.**

In this case the exterior paths $x_2x_3x_4$ and $x_2x_1x_4$ are with exterior face of size either 4 or at least 6. So, we have the following cases.

- (a) Both are with size at least 6. Here we estimate, $f(B) \leq 2 + 4/6$, $n(B) \leq 2 + 1/2 + 1/2$. Hence, $g(B) \leq -3$.
- (b) Only one of the paths is with exterior face of size 4. Without loss of generality, $x_2x_1x_4$ is with exterior face of size 4. Let the exterior face be $x_2x_1x_4x_5x_2$. Notice that x_2x_5 and x_4x_5 are trivial edges. If the exterior face of the exterior path $x_2x_3x_4$ is 6, then x_2 and x_4 are junction vertices which are shared by at least 3 blocks. Hence we have $f(B) \leq 2 + 2/4 + 2/6$ and $n(B) \leq 2 + 2/3$. Therefore, $g(B) \leq -1$. If the exterior face is of size at least 7, then $f(B) \leq 2 + 2/4 + 2/7$. Since $n(B) \leq 2 + 1/2 + 1/2$ and $e(B) = 5$ we get, $g(B) \leq -\frac{1}{7}$.
- (c) Both exterior paths are with exterior faces of size 4. In this case, $f(B) \leq 2 + 2/4 + 2/4$. Let the exterior faces be with boundary $x_2x_1x_4x_5x_2$ and $x_2x_3x_4x_6x_2$ as shown in the Figure 11(right). Observe that the edges x_2x_5, x_4x_6, x_2x_6 and x_4x_6 are trivial blocks. Thus, x_2 and x_4 are junction vertices which are shared with at least 3 blocks. That means, $n(B) \leq 2 + 2/3$. Therefore we get $g(B) \leq 3$.

□

Claim 7. *Let B be a B_3 block in G . Then $g(B) \leq 0$.*

Proof. Let the block B be with vertices x_1, x_2 and x_3 as shown in Figure 12(left). Observe that due to the degree condition, each of the three vertex is junction. Moreover, each of the

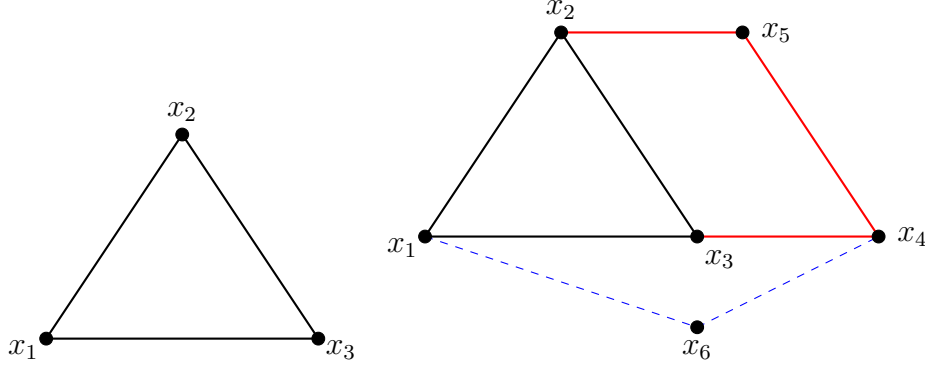


Figure 12: B_3 block

exterior edge is with exterior face of size either exactly 4 or at least 6. We have the following two cases.

1. At least one of the exterior faces of the block is of size 4. Without loss of generality, let x_2x_3 is with exterior face of size 4 and boundary of the exterior face be $x_2x_3x_4x_5x_2$ as shown in Figure 12 (right). Notice that x_2x_5 and x_3x_4 are trivial blocks. Otherwise, it is easy to show that G contains Θ_6 . We consider the following cases.
 - (a) Either x_1x_2 or x_1x_3 is with exterior face of size 4. Let the exterior face of the edge x_1x_3 be with size 4. In this case x_3 is a junction vertex shared by at least 3 blocks. Indeed, suppose the exterior edge x_3 is shared by two blocks only. Thus the boundary of the exterior face of the block x_1x_3 contains the vertex x_4 . Let the exterior face of the edge be $x_1x_3x_4x_6x_1$ as shown in Figure 12(right). Clearly we have a Θ_6 with the 6-cycle $x_1x_3x_2x_5x_4x_6x_1$, which is a contradiction. Thus, we estimate $f(B) \leq 1 + 1/4 + 1/4 + 1/4$ and $n(B) \leq 1/2 + 1/2 + 1/3$. Using $e(B) = 3$, we get $g(B) \leq -1$.
 - (b) Both x_1x_2 or x_1x_3 are with exterior face of size at least 6. Here we have $f(B) \leq 1 + 1/4 + 1/6 + 1/6$, $n(B) \leq 1/2 + 1/2 + 1/2$. Therefore $g(B) \leq -4$.
2. All of the exterior edges are with exterior face at least 6. In this case we have the estimates $f(B) \leq 1 + 1/6 + 1/6 + 1/6$, $n(B) \leq 1/2 + 1/2 + 1/2$. Hence, $g(B) \leq -6$.

□

Claim 8. *Let B be a B_2 block in G . Then $g(B) \leq 0$.*

Proof. Let the end vertices of the block be x_1 and x_2 as shown in Figure 13(left). The two exterior faces of the block are with size at least 4. We consider two cases.

1. Both faces are with size at least 5. In this case $f(B) \leq 1/5 + 1/5$, $n(B) \leq 1/2 + 1/2$. Using $e(B) = 1$, we get $g(B) \leq -7/5$.



Figure 13: B_2 block

2. One of the two exterior faces is of size 4. Notice that the other exterior face of the block is of size at least 5. Otherwise, it is easy to check that there is Θ_6 in the graph. Thus, $f(B) \leq 1/4 + 1/5$. Let the exterior face of the block with size 4 be with boundary $x_1x_2x_3x_4x_1$ as shown in Figure 13(right). In this case either x_1x_4 or x_2x_3 is a trivial block. Otherwise, it is easy to show that G contains Θ_6 . Thus either x_1 or x_2 is shared with at least 3 blocks. Since $\delta(G) \geq 3$. Therefore, $n(B) \leq 1/2 + 1/3$. Therefore, $g(B) \leq -6/5$.

□

We notice that there is only one possible case for which a triangular-block B in G may assume positive $g(B)$. The only possibility briefly explained in the proof of Claim 6(Case 2c). The block and structure of the boundary of the exterior faces of the block are shown in Figure 11(right). The exterior faces of the exterior paths $x_2x_1x_4$ and $x_2x_3x_4$ are with size 4 and the edges x_4x_6 , x_4x_5 , x_2x_6 and x_2x_5 are trivial blocks. Denote the trivial blocks respectively as B^1, B^2, B^3 , and B^4 . Let us call these trivial triangular-blocks as “bad blocks”. It is easy to show that if anyone of these bad blocks plays a similar role with a different $B_{4,b}$ block, the graph contains a Θ_6 . Indeed, Suppose B^1 plays such property. Thus, there is a $B_{4,b}$ block, say B' , in such a way that B^1 is one of the four bad blocks of B' (see the two possible structures in Figure 14). It is easy to show that the graph contains a Θ_6 in both situations, which is a contradiction.

This implies that for each $B_{4,b}$ block meeting the conditions in Claim 6, Case 2c, correspondingly we have unique four bad blocks on the boundaries of exterior faces of the triangular-block. In particular for B , the corresponding four bad blocks are B^1, B^2, B^3 and B^4 . Define $\mathcal{P} = \{B^1, B^2, B^3, B^4\}$. From the prove of Claim 8(Case 2), $g(B^i) \leq -\frac{6}{5}$, $\forall i \in \{1, 2, 3, 4\}$. Clearly,

$$\sum_{B^* \in \mathcal{P}} g(B^*) \leq 3 + 4 \left(-\frac{6}{5} \right) = -\frac{9}{5}.$$

Let \mathcal{B} is the family of all triangular blocks of G and $\mathcal{B}' = \{B_1, B_2, \dots, B_k\}$ be the set of $B_{4,b}$ blocks in G meeting the conditions stated in Claim 6(Case 2c). Based on the observation we have seen, define $\mathcal{P}_i = \{B_i^1, B_i^2, B_i^3, B_i^4, B_i\}$ for all $i \in \{1, 2, 3, \dots, k\}$ and B_i^j , $j \in \{1, 2, 3, 4\}$ are the corresponding four bad trivial blocks of B_i .

Define

$$\mathcal{P}_{k+1} = \mathcal{B} \setminus \bigcup_{i=1}^k \mathcal{P}_i$$

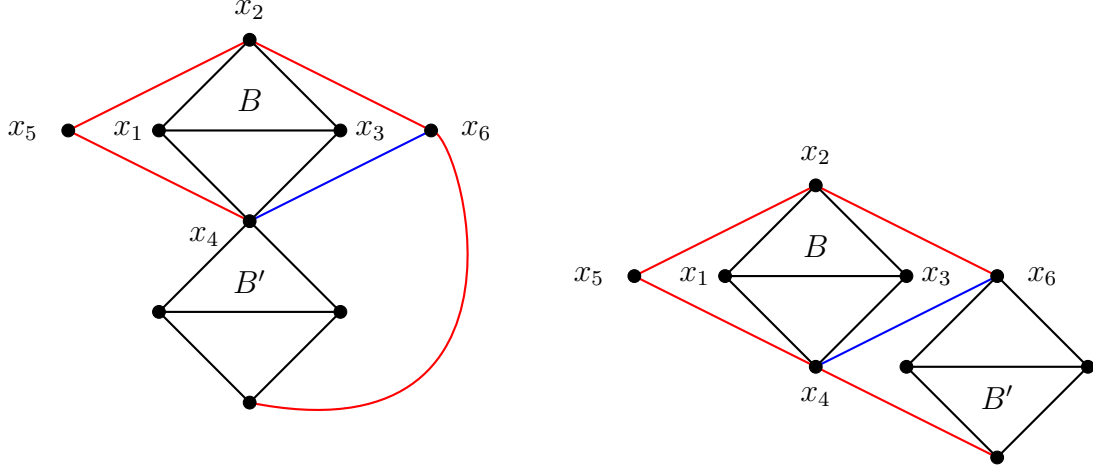


Figure 14: Two possible structures showing two different $B_{4,b}$ blocks sharing a bad trivial blocks

Since $g(B^*) \leq 0$ for all $B^* \in \mathcal{P}_{k+1}$, $\sum_{B^* \in \mathcal{P}_{k+1}} g(B^*) \leq 0$. Let $m = k + 1$. Thus we have the partition $\{\mathcal{P}_1, \mathcal{P}_2, \dots, \mathcal{P}_m\}$ of \mathcal{B} such that $\sum_{B^* \in \mathcal{P}_i} g(B^*) \leq 0$ for all $i \in \{1, 2, 3, \dots, m\}$. Therefore,

$$24f(G) - 17e(G) + 6v(G) = \sum_{i=1}^m \sum_{B^* \in \mathcal{P}_i} g(B^*) \leq 0.$$

This completes the proof of Theorem 4.

5 Proof of Theorem 5

We show the proof for the connected graphs only. Indeed, if the graph is not connected, then we can add an edge between components by keeping the graph connected and Θ_6 -free. So, if we show that the theorem holds for a connected graph, then it holds for disconnected too.

To finish the proof of the Theorem 5, we need the following lemma.

Lemma 3. *Let G be an n -vertex ($n \geq 2$) Θ_6 -free plane graph, then $e(G) \leq \frac{18}{7}n - \frac{27}{7}$.*

Proof. First, we prove for a connected graph, and then it is easy to finish the prove for a disconnected case. Let the number of blocks, maximal subgraphs of G containing no cut vertex, be b . Let the blocks are $B'_1, B'_2, B'_3, \dots, B'_b$ and with number of vertices (including the cut vertices) n_1, n_2, \dots, n_b respectively.

It is easy to check that, if B'_i is a block with $2 \leq n_i \leq 5$, then $e(B'_i) \leq \frac{18}{7}n_i - \frac{27}{7}$. Suppose that $n_i \geq 6$. If there is a vertex of degree 2 in B'_i , say v , then by induction,

$$e(B'_i) = e(G - v) + 2 \leq \frac{18}{7}(n_i - 1) - \frac{27}{7} + 2 = \frac{18}{7}n_i - \frac{31}{7} \leq \frac{18}{7}n_i - \frac{27}{7}.$$

So suppose that $d_{B'_i}(u) \geq 3$ for all $u \in V(B'_i)$. By Theorem 4,

$$e(B'_i) \leq \frac{18}{7}n_i - \frac{48}{7} \leq \frac{18}{7}n_i - \frac{27}{7}.$$

Hence, for each block B'_i , $i \in \{1, 2, \dots, b\}$, $e(B'_i) \leq \frac{18}{7}n_i - \frac{48}{7}$. Therefore,

$$e(G) \leq \sum_{i=1}^b \left(\frac{18}{7}n_i - \frac{27}{7} \right) = \frac{18}{7} \sum_{i=1}^b n_i - \frac{27}{7}b = \frac{18}{7}(n + b - 1) - \frac{27}{7}b = \frac{18}{7}n - \frac{9}{7}b - \frac{18}{7}$$

where we get, $\frac{18}{7}n - \frac{9}{7}b - \frac{18}{7} \leq \frac{18}{7}n - \frac{27}{7}$, for $b \geq 1$. □

Lemma 4. *Let G be an n -vertex and Θ_6 -free connected graph with b blocks. Then $e(G) \leq \frac{18}{7}n - \frac{9b+18}{7}$.*

Proof. Let B'_1, B'_2, \dots, B'_b be the blocks of G with number of vertices n_1, n_2, \dots, n_b respectively (including the cut vertices). By Lemma 3 we have that

$$e(G) = \sum_{k=1}^b e(B'_k) \leq \sum_{k=1}^b \frac{18n_k - 27}{7} = \frac{18n + 18(b-1) - 27b}{7} = \frac{18n}{7} - \frac{9b+18}{7}. \quad \square$$

Note that Lemma 4 implies that if G is an n -vertex Θ_6 -free planar graph with $b \geq 4$ blocks, then $e(G) \leq \frac{18n}{7} - \frac{54}{7} < \frac{18n}{7} - \frac{48}{7}$.

We need the following claim to prove the lemma which follows.

Claim 9. *If G is an n -vertex Θ_6 -free graph containing a vertex of degree 2 such that, $G - v$ has at least 3 blocks, then $e(G) < \frac{18}{7}n - \frac{48}{7}$.*

Proof. By Lemma 4 we have that $e(G - v) \leq \frac{18(n-1)}{7} - \frac{45}{7}$, hence

$$e(G) \leq \frac{18n - 18 - 45}{7} + 2 = \frac{18n}{7} - \frac{49}{7} < \frac{18n}{7} - \frac{48}{7}.$$

□

Lemma 5. *Let G be an n -vertex Θ_6 -free 2-connected graph, then*

$$e(G) \leq \frac{18n}{7} - \begin{cases} \frac{38}{7} & \text{for } n = 6, \\ \frac{42}{7} & \text{for } n = 7, \\ \frac{46}{7} & \text{for } n = 8, \\ \frac{48}{7} & \text{for } n \geq 9. \end{cases}$$

Proof. Let $n = 6$, we are going to show that in fact $e(G) \leq \frac{18}{7}n - \frac{38}{7} = 10$ for any Θ_6 -free graph. Let G be a Θ_6 on 6 vertices. We claim that G does not contain 11 edges. Indeed, if G contains 11 edges, then an embedding of G on the plane contains a 4-face and all the remaining faces are of size 3. Thus, fixing the 4-face the unbounded face of the plane drawing of G , then G a triangular-block of 6 vertices. Thus, G contains a Θ_6 , which is a contradiction. Therefore, G must contain at most 10 edges.

Let $n = 7$, and G an n -vertex Θ_6 -free plane graph which is 2-connected. We want to show that $e(G) \leq \frac{18}{7}n - \frac{42}{7}$. Let v be a vertex of degree 2 in G . Thus $e(G - v) \leq \frac{18}{7}(n - 1) - \frac{38}{7}$. Hence $e(G) = e(G - v) + 2 \leq \frac{18}{7}(n - 1) - \frac{38}{7} + 2 \leq \frac{18}{7}n - \frac{42}{7}$.

It can be shown that for any $n = 7$ and Θ_6 -free plane graph G , $e(G) \leq \frac{18}{7}n - \frac{42}{7}$. Indeed, if G is 2-connected, we have already proved. If G contains at least 3 blocks, then it holds by Lemma 4. Suppose that it contains only 2 blocks. Let the blocks are B'_1 and B'_2 with number of vertices n_1 and n_2 respectively. If $n_1 = 2$ and $n_2 = 6$, then $e(B'_1) = 1$ and $e(B'_2) \leq 10$. Hence $e(G) \leq 11$, which implies $e(G) \leq \frac{18}{7}n - \frac{42}{7}$. If $n_1 = 3$ and $n_2 = 5$, then $e(B'_1) = 3$ and $e(B'_2) \leq 9$. Thus, $e(G) \leq 12$, that means $e(G) \leq \frac{18}{7}n - \frac{42}{7}$. If $n_1 = n_2 = 4$, then $e(B'_1) \leq 6$ and $e(B'_2) \leq 6$. Thus, $e(G) \leq 12$, again $e(G) \leq \frac{18}{7}n - \frac{42}{7}$. Therefore from all the results we have, $e(G) \leq \frac{18}{7}n - \frac{42}{7}$.

Let $n = 8$, and G an n -vertex Θ_6 -free plane graph which is 2-connected. We want to show that $e(G) \leq \frac{18}{7}n - \frac{46}{7}$. Let v be a vertex of degree 2 in G . Thus, $G - v$ is a plane graph of 7-vertex Θ_6 -free plane graph. Thus, from the previous result $e(G - v) \leq \frac{18}{7}(n - 1) - \frac{42}{7}$. Thus, $e(G) \leq \frac{18}{7}(n - 1) - \frac{42}{7} + 2 = \frac{18}{7}n - \frac{46}{7}$.

We observe further bounds of $e(G)$ if it is not 2-connected. If G contains two blocks, we claim that $e(G) \leq \frac{18}{7}n - \frac{39}{7}$. Indeed, let the blocks are B'_1 and B'_2 with n_1 and n_2 vertices respectively. If $n_1 = 2$ and $n_2 = 7$, then $e(B'_1) = 1$ and $e(B'_2) \leq 12$. Thus, $e(G) \leq 13$, that means $e(G) \leq \frac{18}{7}n - \frac{46}{7}$. If $n_1 = 3$ and $n_2 = 6$, then $e(B'_1) = 3$ and $e(B'_2) \leq 10$. Thus, $e(G) \leq 13$. If $n_1 = 4$ and $n_2 = 5$, then $e(B'_1) \leq 6$ and $e(B'_2) \leq 9$. Thus, $e(G) \leq 15$. Therefore, $e(G) \leq \frac{18}{7}n - \frac{39}{7}$. Observe that the only structure that $e(G) > \frac{18}{7}n - \frac{46}{7}$ is when B'_1 is a K_4 and B'_2 is a K_5^- or vice-versa (see Figure 15).

Let $n = 9$, and G be an n -vertex Θ_6 -free plane graph which is 2-connected. We want to show that $e(G) \leq \frac{18}{7}n - \frac{50}{7}$ and hence $e(G) \leq \frac{18}{7}n - \frac{48}{7}$. Let v be a vertex of degree 2 in G . Thus, $G - v$ is plane graph of 8 vertices which is Θ_6 free. If $G - v$ is 2-connected, then from previous result, $e(G - v) \leq \frac{18}{7}(n - 1) - \frac{46}{7}$. Thus, $e(G) \leq \frac{18}{7}(n - 1) - \frac{46}{7} + 2 = \frac{18}{7}n - \frac{50}{7}$. If $G - v$ is with two blocks, then $e(G) \leq \frac{18}{7}(n - 1) - \frac{46}{7}$. Indeed, the only case that we get $e(G - v) > \frac{18}{7}(n - 1) - \frac{46}{7}$ is when one block is of size 4 and the other is of size 5 (see Figure 15). But in that case, there is no possible way to join the two blocks with a cherry. If that is so, it is easy to get a Θ_6 in the graph. Therefore, $e(G) \leq \frac{18}{7}(n - 1) - \frac{46}{7}$. Thus, $e(G) \leq \frac{18}{7}(n - 1) - \frac{46}{7} + 2 = \frac{18}{7}n - \frac{50}{7}$. Therefore $e(G) \leq \frac{18}{7}n - \frac{50}{7}$.

Let $n = 9$ and G be an n -vertex Θ_6 -free plane graph containing two blocks, say B'_1 and B'_2 with number of vertices n_1 and n_2 respectively. If $n_1 = 2$ and $n_2 = 8$, then $e(B'_1) = 1$ and $e(B'_2) \leq 14$. Thus, $e(G) \leq 15$. That means, $e(G) \leq \frac{18}{7}n - \frac{50}{7}$. If $n_1 = 3$ and $n_2 = 7$, then $e(B'_1) = 3$ and $e(B'_2) \leq 12$. Again in this case $\frac{18}{7}n - \frac{50}{7}$. If $n_1 = 4$ and $n_2 = 6$, the $e(B'_1) \leq 6$ and $e(B'_2) \leq 10$ and again $e(G) \leq \frac{18}{7}n - \frac{50}{7}$. If $n_1 = n_2 = 5$, then $e(B'_1) \leq 9$

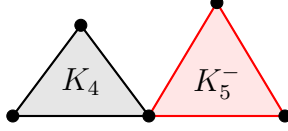


Figure 15: Structure of a graph on 8 vertices and containing two blocks of size 4 and 5.

and $e(B_2) \leq 9$. If $e(B'_1) = e(B'_2) = 9$, then $e(G) = 18$ in this case both B'_1 and B'_2 are K_5^- and hence the structure of the graph is well known (see Figure 16(a)). The remaining only possibility that we have $e(G) > 16$ is when one block contains 9 edges and the other contains 8 edges. Without loss of generality, assume $e(B'_1) = 9$ and $e(B'_2) = 8$. Thus, B'_1 is K_5^- . Now we need to figure out the structure of B'_2 . Notice that B'_2 misses only one edge not to be a maximal planar graph with 5 vertices. We denote the blocks as K_5^- . Notice that the plane drawing of B'_2 contains one 4-face and the others are all 3-face. Thus, if the unbounded face of B'_2 is a triangle, then the structure of G is as shown in Figure 16(b). If the unbounded face of B'_2 is a 4-face, then the structure of the G is as shown in Figure 16(c).

Let $n = 10$, and G be an n -vertex Θ_6 -free plane graph which is 2-connected. We want to show that $e(G) \leq \frac{18}{7}n - \frac{54}{7}$. Let v be a vertex of degree 2. Thus, $G - v$ is a plane graph of 9 vertices which is also Θ_6 -free. If $G - v$ is 2-connected, then from the previous result, $e(G - v) \leq \frac{18}{7}(n - 1) - \frac{50}{7}$. Thus, $e(G) \leq \frac{18}{7}(n - 1) - \frac{50}{7} + 2 = \frac{18}{7}n - \frac{54}{7}$. If $G - v$ contains two blocks, then from the previous observation there are three possibilities such that $e(G - v) > \frac{18}{7}(n - 1) - \frac{50}{7}$. The structure of these graphs are shown in Figure 16(a,b,c). However, in all the cases if there is a cherry joining the two blocks, then it is easy to get a Θ_6 in the graph. Thus, such conditions could not appear in the $G - v$ graph. This implies that $e(G) \leq 16$. In other words, $e(G - v) \leq \frac{18}{7}(n - 1) - \frac{50}{7}$. Therefore, $e(G) \leq \frac{18}{7}n - \frac{50}{7} + 2 = \frac{18}{7}n - \frac{54}{7}$.

Claim 10. *Let G be an n -vertex graph with a vertex v of degree 2, if $G - v$ has exactly 2 blocks, one with size at least 6, then $e(G) < \frac{18}{7}n - \frac{48}{7}$.*

Proof. Let B'_1 and B'_2 be the block of G of sizes n_1 and n_2 respectively, with $n_1 \geq 6$. By induction we may assume that $e(B_1) \leq \frac{18n_1}{7} - \frac{38}{7}$ and by Lemma 3 $e(B_2) \leq \frac{18n_2}{7} - \frac{27}{7}$, therefore

$$e(G) \leq e(B'_1) + e(B'_2) + 2 \leq \frac{18(n_1 + n_2)}{7} - \frac{27 + 38 - 14}{7} = \frac{18n}{7} - \frac{51}{7} < \frac{18n}{7} - \frac{48}{7}. \quad \square$$

Now suppose $n \geq 11$. If $\delta(G) \geq 3$, by Theorem 4 $e(G) \leq \frac{18n}{7} - \frac{48}{7}$. So suppose there is a vertex v in G with degree $d(v) \leq 2$. If $G - v$ is 2-connected, then by induction hypothesis $e(G) \leq \frac{18(n-1)}{7} - \frac{48}{7} + 2 < \frac{18n}{7} - \frac{48}{7}$. If $G - v$ contains precisely 2 blocks of sizes n_1, n_2 with $n_1 \geq n_2$, then since $n_1 + n_2 = n$ we have that $n_1 \geq 6$, and so, by Claim 10 we have that $e(G) < \frac{18n}{7} - \frac{48}{7}$. If $G - v$ contains at least three blocks, then by Claim 9 $e(G) < \frac{18n}{7} - \frac{48}{7}$. \square

Lemma 6. *Let G be an n -vertex, Θ_6 -free plane graph containing a block, say B with n_b vertices, such that $e(B) \leq \frac{18}{7}n_b - \frac{48}{7}$. Then $e(G) \leq \frac{18}{7}n - \frac{48}{7}$.*

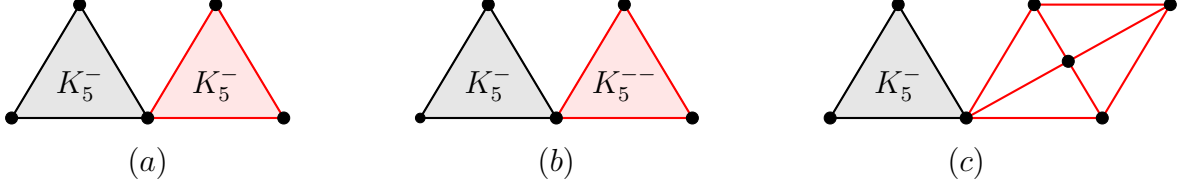


Figure 16: Structure of graphs on 9 vertices and containing two blocks of size 5.

Proof. Let G contains b blocks. If $b \geq 4$, then by Lemma 4, the statement holds. Suppose that G contains at most 3 blocks. The number of cut vertices contained in B is at most 2. We consider two cases:

1. B contains no cut vertex. In this case $G = B$ and hence, $e(G) \leq \frac{18}{7}n - \frac{48}{7}$.
2. B contains only one cut vertex. Let G' be the graph obtained by deleting all vertices of B except the cut vertex. Clearly, $v(G') = n - (n_b - 1)$. Using Lemma 3, $e(G') \leq \frac{18}{7}(n - (n_b - 1)) - \frac{27}{7}$. Therefore,

$$e(G) = e(G') + e(B) \leq \frac{18}{7}(n - (n_b - 1)) - \frac{27}{7} + \frac{18}{7}n_b - \frac{48}{7} = \frac{18}{7}n - \frac{57}{7}.$$

Therefore, $e(G) \leq \frac{18}{7}n - \frac{48}{7}$.

3. B contains two cut vertices. Let G' be the graph obtained by deleting all vertices of B except the two cut vertices. Then G' is a disconnected graph with two components, say B'_1 and B'_2 with number of vertices n_1 and n_2 respectively. Clearly $n_1 + n_2 = n - (n_b - 2)$. Using Lemma 3, $e(B'_1) \leq \frac{18}{7}n_1 - \frac{27}{7}$ and $e(B'_2) \leq \frac{18}{7}n_2 - \frac{27}{7}$. Hence,

$$\begin{aligned} e(G') = e(B'_1) + e(B'_2) &\leq \left(\frac{18}{7}n_1 - \frac{27}{7} \right) + \left(\frac{18}{7}n_2 - \frac{27}{7} \right) \leq \frac{18}{7}(n_1 + n_2) - \frac{54}{7} \\ &= \frac{18}{7}(n - (n_b - 2)) - \frac{54}{7}. \end{aligned}$$

Thus,

$$e(G) = e(G') + e(B) \leq \frac{18}{7}(n - (n_b - 2)) - \frac{54}{7} + \frac{18}{7}n_b - \frac{48}{7} = \frac{18}{7}n - \frac{64}{7}.$$

Therefore, $e(G) < \frac{18}{7}n - \frac{48}{7}$. □

Now we give the proof of Theorem 5. Notice that G contains at least 14 vertices. If G is 2-connected, then we are done by Lemma 5. Thus we suppose that G contains at least 2 blocks and at most 3 blocks. Otherwise, we are done by Lemma 4. So, we distinguish two cases:

1. G contains only two blocks. Let the blocks be B'_1 and B'_2 with number of vertices n_1 and n_2 respectively, such that $n_1 \geq n_2$. If $n_1 \geq 9$, then by Lemma 5 and Lemma 6, $e(G) \leq \frac{18}{7}n - \frac{48}{7}$.

Since $n + 1 = n_1 + n_2$, we have that if $n \geq 16$ then $n_1 \geq 9$. We may assume that either $n = 14$ and $n_1 = 8, n_2 = 7$ or $n = 15$ and $n_1 = 8, n_2 = 8$.

In the first case by Lemma 5, $e(B'_1) \leq \frac{18}{7}n_2 - \frac{46}{7}$ and $e(B'_2) \leq \frac{18}{7}n_1 - \frac{42}{7}$. Therefore,

$$\begin{aligned} e(G) &= e(B'_1) + e(B'_2) \leq \frac{18}{7}(n_1 + n_2) - \frac{88}{7} \\ &= \frac{18}{7}(n + 1) - \frac{88}{7} = \frac{18}{7}n - \frac{70}{7} < \frac{18}{7}n - \frac{48}{7}. \end{aligned}$$

In the second case by Lemma 5, $e(B'_1) \leq \frac{18}{7}n_2 - \frac{46}{7}$ and $e(B'_2) \leq \frac{18}{7}n_2 - \frac{46}{7}$. Therefore,

$$\begin{aligned} e(G) &= e(B'_1) + e(B'_2) \leq \frac{18}{7}(n_1 + n_2) - \frac{92}{7} \\ &= \frac{18}{7}(n + 1) - \frac{92}{7} = \frac{18}{7}n - \frac{74}{7} < \frac{18}{7}n - \frac{48}{7}. \end{aligned}$$

2. G contains three blocks. Let the blocks be B'_1, B'_2 and B'_3 with number of vertices n_1, n_2 and n_3 respectively, such that $n_1 \geq n_2 \geq n_3$. Since $n + 2 = n_1 + n_2 + n_3$, and $n \geq 14$ we have that $n_1 \geq 6$, hence, by Lemma 5, $e(B'_1) \leq \frac{18}{7}n_1 - \frac{38}{7}$. From Lemma 3, $e(B'_i) \leq \frac{18}{7}n_2 - \frac{27}{7}$, $i \in \{2, 3\}$. Thus,

$$\begin{aligned} e(G) &= e(B'_1) + e(B'_2) + e(B'_3) \leq \frac{18}{7}(n_1 + n_2 + n_3) - \frac{27}{7} - \frac{27}{7} - \frac{38}{7} \\ &= \frac{18}{7}(n + 2) - \frac{92}{7} = \frac{18}{7}n - \frac{56}{7} \\ &< \frac{18}{7}n - \frac{48}{7}. \end{aligned}$$

Notice that for $n = 13$, we have a counter example for which Theorem 5 does not hold. One counter example is the graph G shown in Figure 17, where the graph contains 27 edges but $e(G) > \frac{18}{7}n - \frac{48}{7}$.

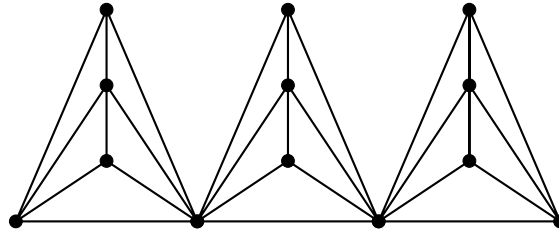


Figure 17: Maximal counter example

6 Concluding Remarks and Conjectures

As we know, Θ_k is the family of Theta graphs on k vertices, that is, graphs obtained from the k -cycle by adding an additional edge joining two non-consecutive vertices. In particular, $\Theta_6 = \{\Theta_6^1, \Theta_6^2\}$, where Θ_6^1 and Θ_6^2 are the symmetric and asymmetric Θ_6 -graphs which are shown in Figure 18(left) and Figure 18(right) respectively. One can ask what the planar Turán number of Θ_6^1 and Θ_6^2 are. What can be said about the tight upper bounds of $\text{ex}_{\mathcal{P}}(n, \Theta_6^1)$ and $\text{ex}_{\mathcal{P}}(n, \Theta_6^2)$?

We pose the following asymptotic conjectures.

Conjecture 1.

1. $\text{ex}_{\mathcal{P}}(n, \Theta_6^1) = \frac{45}{17}n + \Theta(1)$.
2. $\text{ex}_{\mathcal{P}}(n, \Theta_6^2) = \frac{18}{7}n + \Theta(1)$.

The lower bound for $\text{ex}_{\mathcal{P}}(n, \Theta_6^1)$ is recursively construction. The base construction is obtained by identifying the outer pentagon and the boundary of the shaded inner pentagon of Figure 19(a) and (b) respectively. Each of the triangular region(shaded region) in the construction is a K_5^- . Notice that, every non-triangular face in the construction is of size 5 and is surrounded by five K_5^- 's. It can be checked that the graph contains no Θ_6^1 and has as many edges as what indicated in the bound.

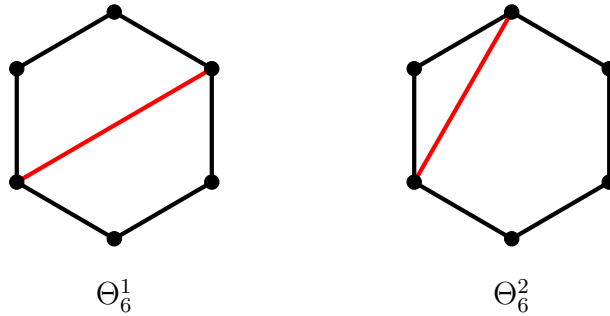


Figure 18: Θ_6 -graphs

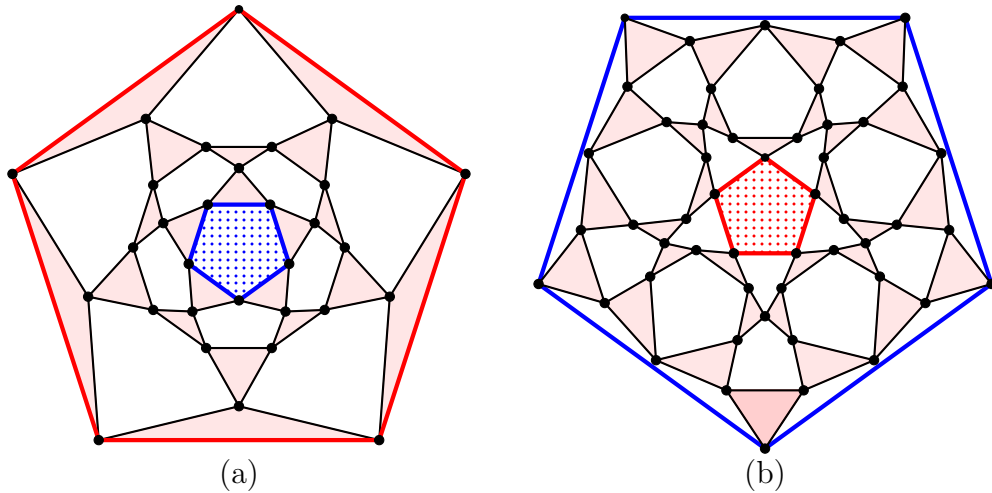


Figure 19: Θ_6^1 -free planar graph

References

- [1] C. Dowden. Extremal c_4 -free/ c_5 -free planar graphs. *Journal of Graph Theory* **83** (2016), 213-230.
- [2] P. Erdős. On the structure of linear graphs. *Israel Journal of Mathematics* **1**(1963), 156-160.
- [3] P. Erdős. On the number of complete subgraphs contained in certain graphs. *Publ. Math.Inst. Hung. Acad. Sci.* **7** (1962), 459-464.
- [4] D. Ghosh, E. Györi, R. R. Martin, A. Paulos, C. Xiao. Planar Turán Number of the 6-Cycle. *arXiv:2004.14094* (2020).
- [5] Y. Lan, Y. Shi, and Z.-X. Song. Extremal theta-free planar graphs. *Discrete Mathematics* **342**(12)(2019), Article 111610.
- [6] P. Turán. On an extremal problem in graph theory. *Matematikai es Fizikai Lapok* (In Hungarian) **48**(1941), 436-452.
- [7] A. Zykov. On some properties of linear complexes. *Mat. Sb. (N.S.)* **24**(66)(1949), 163-188.